



## Lesson 14: Writing Division Expressions

### Classwork



#### Example 1

Fill in the three remaining squares so that all the squares contain equivalent expressions.

	<b>Equivalent Expressions</b>	
$15 \div 3$		

#### Example 2

Fill in a blank copy of the four boxes using the words *dividend* and *divisor* so that it is set up for any example.

	<b>Equivalent Expressions</b>	
$\div$		

**Exercises**

Complete the missing spaces in each rectangle set.

